






JULY 2023

<u>Sunday</u>	<u>Monday</u>	<u>Tuesday</u>	<u>Wednesday</u>	<u>Thursday</u>	<u>Friday</u>	<u>Saturday</u>
						1
2	3 Using the digits 5, 7, and 2..... 1. Write a number that rounds to 800 2. Write a number that rounds to 300	4 What does the phrase all-American mean to you? Write about someone who you feel fits this description.	5 Use a ruler to measure five objects to the nearest 1/8 inch. 	6 What is your most prized possession? Write a paragraph explaining why it is so important to you.	7 (add signs and/or parentheses as needed.) $1\ 7\ 7\ 6 = 1,062$	8
9	10 Write 5 multiples of the numbers 7, 8, 9,	11 July is National Ice Cream Month. If you could share an ice-cream cone with anyone in the world, whom would you choose and why? 	12 Using the digits 8, 1, and 9 1. Write a number that rounds to 800 2. Write a number that rounds to 900	13 Everyone dreams of the job they will hold in the future. Write about yours.	14 Use a ruler to measure 5 objects to the nearest ¼ inch. 	15
13	17 Create 3 math problems with an answer using facts from a non-fiction book.	18 The first sugar cane plantation was started on this date in 1835. Write a paragraph describing the sweetest thing anyone has ever done for you.	19 Write 4 sets of factors that have a product of 54.	20 Today is the birthdate of Beatrix Potter, creator of <i>The Tale of Peter Rabbit</i> . Write a paragraph describing your favorite character from a childhood book.	21 (add signs and/or parentheses as needed.) $1\ 7\ 7\ 6 = 295$	22
23/30	24/31 Which is heavier, a pound of rocks or a pound of feathers?	25 The summer is drawing to an end. As you reflect on it, what did you enjoy most?	26 Find 2 numbers that have a <u>sum</u> of 15 and a <u>difference</u> of 3.	27 Describe the taste, texture, and smell of your favorite summertime treat.	28 Ted is 3 years old. Lisa is 3 times older than Ted. Al is 6 times older than Lisa. How old is Al?	29