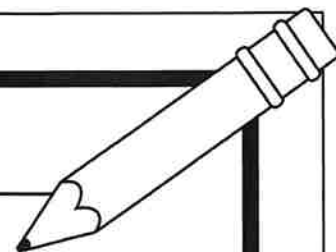


Name: _____

Week 2



Return to your teacher on Friday.



	Packet	Nightly Reading
Monday	Math Homework Sheet	Read to a stuffed animal for 15 minutes
Tuesday	Language & Foundations Homework Sheet	Read to someone else for 15 minutes
Wednesday	Reading Homework Sheet	Read by yourself for 15 minutes
Thursday	Writing Homework Sheet	Read to someone else for 15 minutes

	Book Read	Parent or Guardian Signature
Mon.		
Tues.		
Wed.		
Thurs.		

Name: _____

Math

Count the dots on the ten frame.



_____ dots

Count the tallies.



_____ tallies

Solve the addition problems.

$$3 + 2 = \underline{\quad}$$

$$4 + 0 = \underline{\quad}$$

$$2 + 1 = \underline{\quad}$$

$$0 + 5 = \underline{\quad}$$

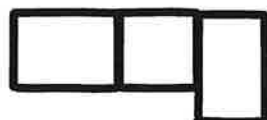

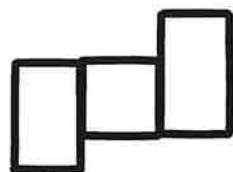
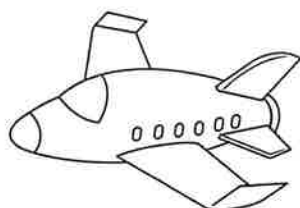

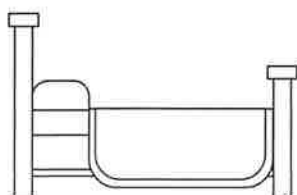
What numbers are missing?

$$22 \quad \underline{\quad} \quad 24$$
$$\quad \quad \underline{\quad} \quad 26$$

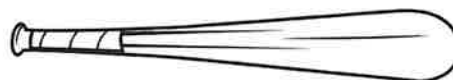
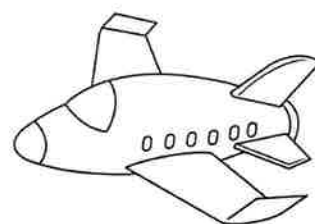

$$28 \quad \underline{\quad} \quad 30$$

Name: _____

Spell these words.


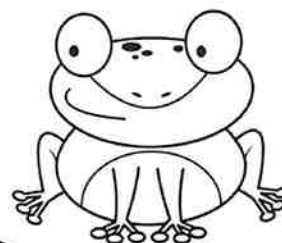


Circle the words with
/e/ in the middle.



Draw a line to match
the blend to the
picture.

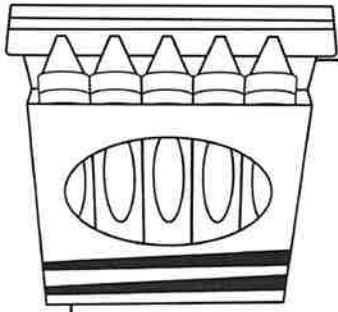
cl
fr
tw



Name: _____

Reading

Draw a picture of the word.



cat

jet

pig

rock

jug

rat

Name: _____

Write a sentence about this picture, then color.